
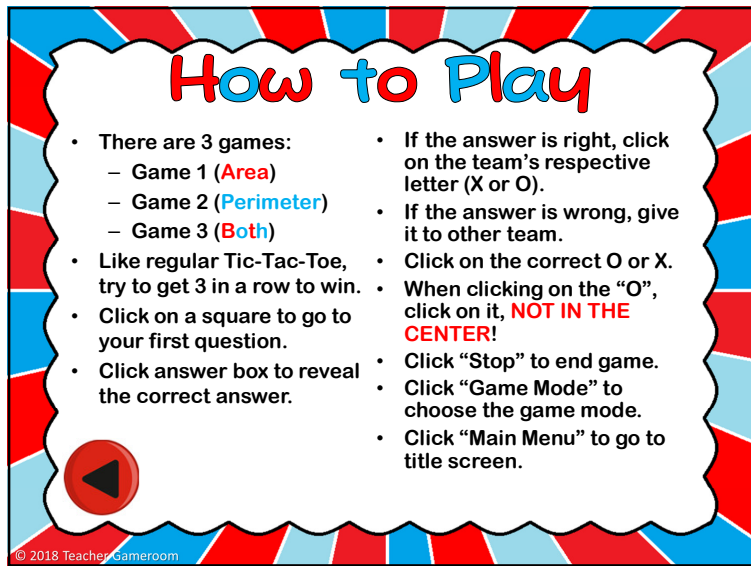



By purchasing this product, you agree not to share, resell, copy, or alter this product in anyway. You agree not share without the purchase of multiple licenses. All sales final.


© 2018 Teacher Gameroom (Chandra Martin)



By purchasing this product, you agree not to share, resell, copy, or alter this product in anyway. You agree not share without the purchase of multiple licenses. All sales final.

© 2018 Teacher Gameroom (Chandra Martin)

 **Game 1 - Square** ¹
What is the area?

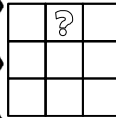



4 mm.

16 mm.²

Main Menu Answer Board

© 2018 Teacher Gameroom *Shapes are not drawn to scale.

 **Game 1 - Square** ²
What is the area?





3 km. 4 km.

12 km.²

Main Menu Answer Board

© 2018 Teacher Gameroom *Shapes are not drawn to scale.

 **Game 1 - Square** ³
What is the area?

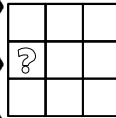



1 m. 6 m.

6 m.²

Main Menu Answer Board

© 2018 Teacher Gameroom *Shapes are not drawn to scale.

 **Game 1 - Square** ⁴
What is the area?



5 mm.

25 mm.²

Main Menu Answer Board

© 2018 Teacher Gameroom *Shapes are not drawn to scale.

By purchasing this product, you agree not to share, resell, copy, or alter this product in anyway. You agree not share without the purchase of multiple licenses. All sales final.

© 2018 Teacher Gameroom (Chandra Martin)

Scoreboard 2

?	?	?
?	?	?
?	?	?

STOP **Game Mode**

© 2018 Teacher Gameroom

Game 2 - Square 1
What is the **perimeter**?

4 m. 5 m. 4 m.

13 m.

Main Menu Answer Board

© 2018 Teacher Gameroom

Game 2 - Square 2
What is the **perimeter**?

5 mm. 4 mm. 4 mm. 6 mm.

19 mm.

Main Menu Answer Board

© 2018 Teacher Gameroom

Game 2 - Square 3
What is the **perimeter**?

3 km. 3 km. 5 km. 5 km.

20 km.

Main Menu Answer Board

© 2018 Teacher Gameroom

By purchasing this product, you agree not to share, resell, copy, or alter this product in anyway. You agree not share without the purchase of multiple licenses. All sales final.

© 2018 Teacher Gameroom (Chandra Martin)

X **Scoreboard** **3** **O**


?	?	?
?	?	?
?	?	?

STOP **Game Mode**

© 2018 Teacher Gameroom

? **Game 3 - Square** **1**

What is the **area**?



49 cm.²

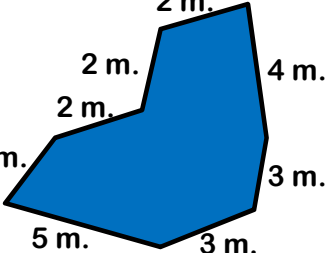
7 cm.

Main Menu **Answer** **Board**

© 2018 Teacher Gameroom

? **Game 3 - Square** **2**

What is the **perimeter**?




23 m.

Main Menu **Answer** **Board**

© 2018 Teacher Gameroom

? **Game 3 - Square** **3**

What is the **area**?



54 mm.²

9 mm. 6 mm.

Main Menu **Answer** **Board**

© 2018 Teacher Gameroom